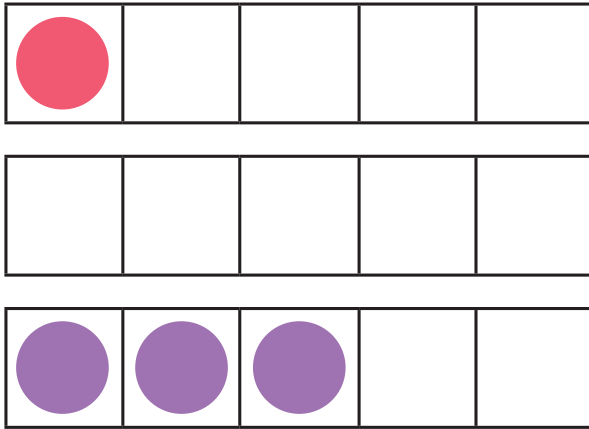



EYFS Maths Activity Mat: Introducing Zero


Which five-frame shows 0?
Circle it.



Can you practise writing 0?



Circle the jar that has 0 sweets.



Can you count how many fingers each child is holding up? Write your answer in the boxes.




0 1 2
3 4 5

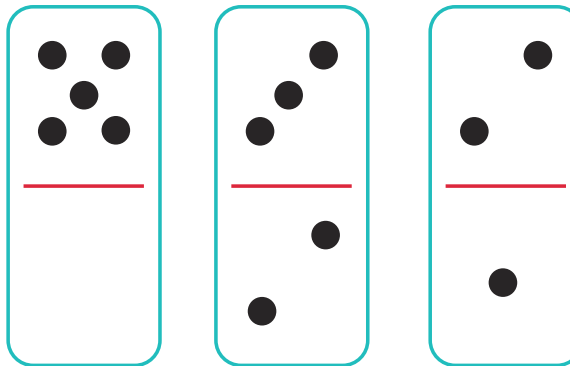


EYFS Maths Activity Mat: Comparing Numbers to 5

Circle the dog that has the **most** bones.



Which dominoes have the **same** number of spots?
Circle them.




This tree has 4 apples.



Can you draw **fewer** apples on this tree?



Circle the group that has the **most** balls.

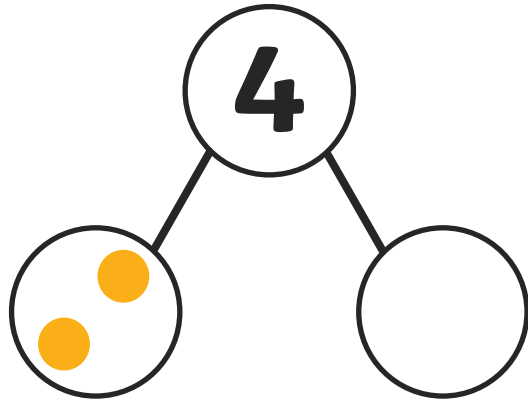


0 1 2
3 4 5




EYFS Maths Activity Mat: Composition of 4 and 5

Complete the part-whole model.



Draw some frogs on the other log to make 5 altogether.





How many frogs did you add?

Draw some red counters on the five-frame so it has 5 counters in total.




How many counters did you add to the five-frame?

A farmer had 4 sheep. 1 sheep is in the first field. Circle the number of sheep that should be in the second field.




0 1 2
3 4 5




EYFS Maths Activity Mat: Comparing Capacity

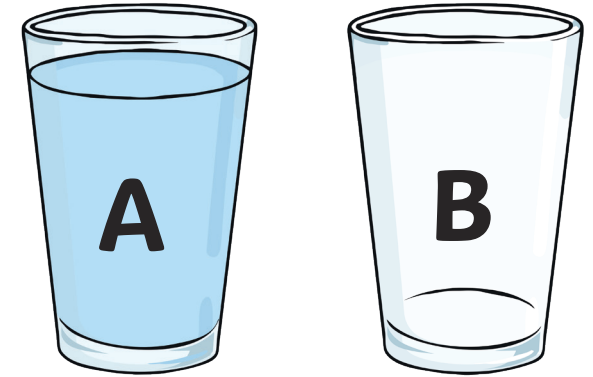
Draw water in the glass so it is **half full**.




Circle the jug that has the **most** juice in.



Draw water in glass B so there is **less** than glass A.



Circle the jug that is **empty**.




0 1 2
3 4 5



EYFS Maths Activity Mat: 6, 7 and 8


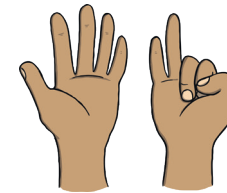
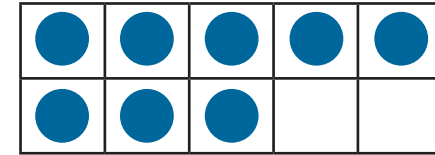
Draw 6 spots on the ladybird.




Draw 8 legs on the spider.



Which picture shows 7? Circle it.



Which picture does **not** show 6, 7 or 8? Circle it.




0 1 2 3 4
5 6 7 8



EYFS Maths Activity Mat: Making Pairs

Match the number to its pair.




2

3

1



How many pairs of legs does this spider have?



How many pairs of animals are on Noah's ark?



Match the mittens so that they make a pair.



0

1

2

3

4

5

6


7

8



EYFS Maths Activity Mat: Combining Two Groups


Akhil rolled 2 dice. What did he score altogether?




The teddies counted their cupcakes. How many do they have altogether?



I have 4 rainbow fish and 1 goldfish. How many fish do I have altogether?



Johara put her socks out to dry. 5 are blue and 2 are orange. How many socks does Johara have altogether?




0 1 2 3 4
5 6 7 8



EYFS Maths Activity Mat: Length and Height

How many blocks tall are these flowers?




Circle the **shortest** girl.



Draw a snake that is **longer** than this snake.



The bird wants to eat the **thinnest** worm. Circle it.



0 1 2 3 4
5 6 7 8




EYFS Maths Activity Mat: 9 and 10


Draw 9 counters on the ten-frame.




Nico put 10 shells on his sandcastle. Circle Nico's sandcastle.



Draw 10 stars in the sky.



Can you find the domino with 9 spots? Circle it.

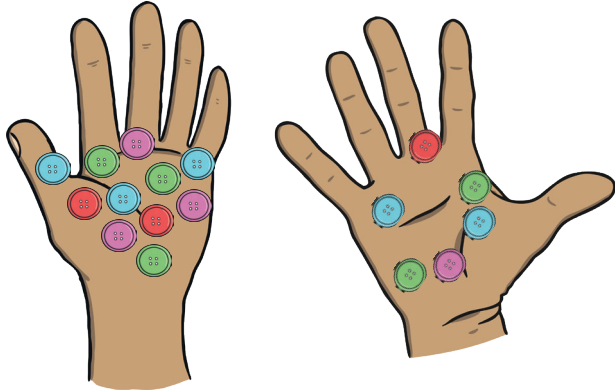


0 1 2 3 4 5
6 7 8 9 10

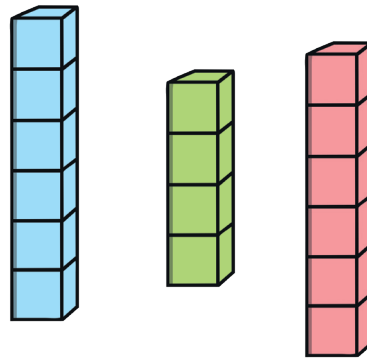


EYFS Maths Activity Mat: Comparing Numbers to 10

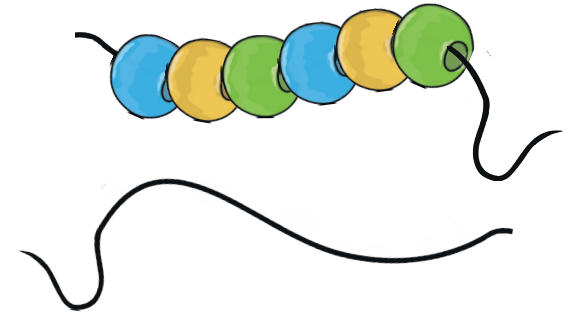
Two friends picked up some buttons. Who picked up the **most** buttons? Put a circle around their hand.



I built 3 towers. Which towers have the same number of bricks? Circle them.



Mahdi made a bracelet with 6 beads. Can you draw a bracelet with **fewer** beads?



3 brothers compared the number of letters in their name. Count the letters in each name.

Chidi Bai Frank




Which name has the **fewest** letters in?

0 1 2 3 4 5
6 7 8 9 10



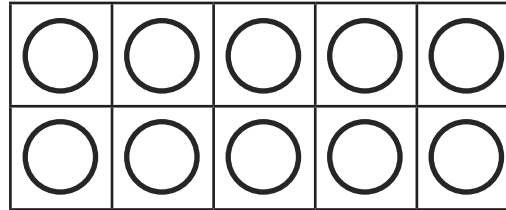
EYFS Maths Activity Mat: Bonds to 10

Draw some more shells to make 10 in total.



How many shells did you add?

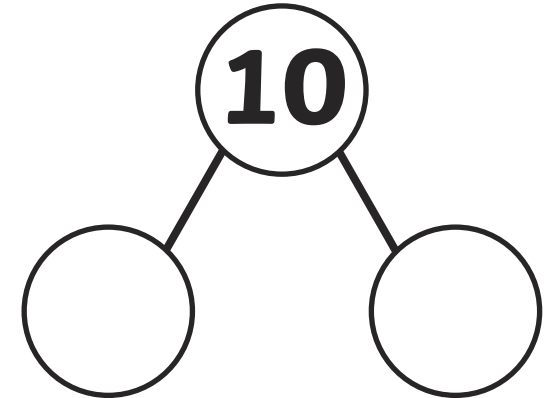
Choose two colours. Colour in the counters.




Can you finish the number sentence?

$$\square + \square = 10$$

Add 2 numbers to the part-whole model to make it correct.



There were 10 teddies in the bed and 7 fell out.
How many are left in bed?

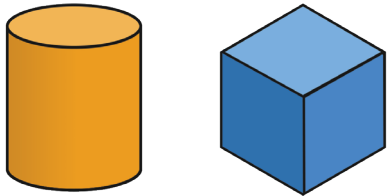


0 1 2 3 4 5
6 7 8 9 10

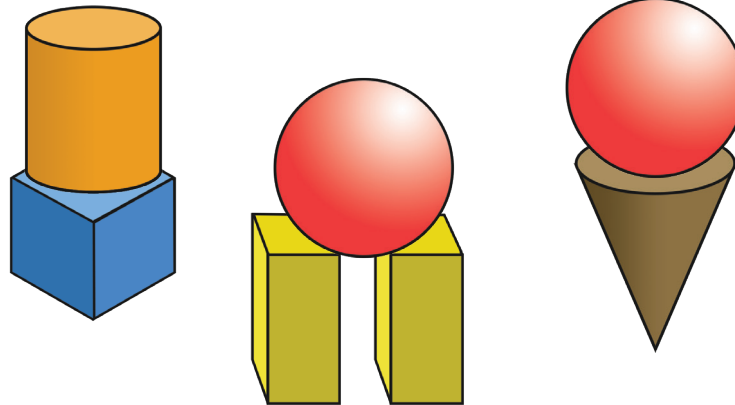


EYFS Maths Activity Mat: 3D Shapes

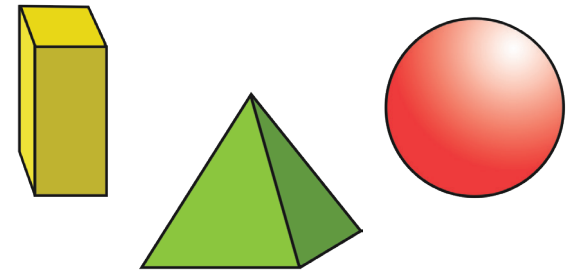
Circle the **cube**.



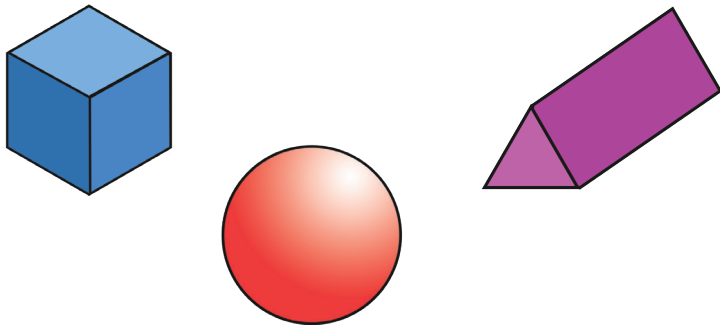
Which model has 1 cube and 1 cylinder?



What type of shape is a cereal box? Circle it.



Circle the 3D shape that can roll.



0 1 2 3 4 5
6 7 8 9 10



EYFS Maths Activity Mat: Pattern

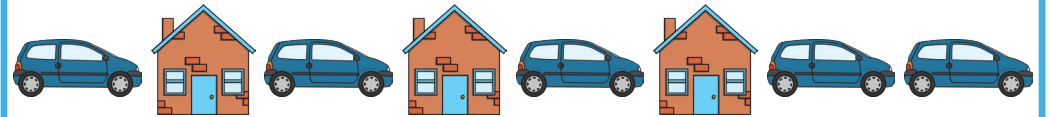
Draw the next shape in the pattern.




Complete the pattern.



Which part of the pattern is wrong? Circle it.



Circle the next picture in the pattern.



0 1 2 3 4 5
6 7 8 9 10



EYFS Maths Activity Mat

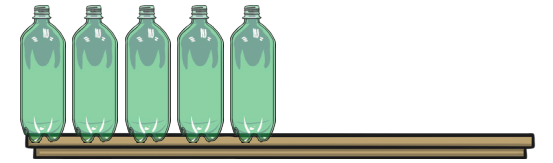
Jill sat her toys on 2 shelves.
How many toys does she have altogether?



Complete the
number sequence.




There are 5 green bottles
sitting on the wall. Draw more
bottles on the wall so that
there are 10 altogether. How
many bottles did you add?



$$5 + \square = 10$$

Which bus has the **most** children? Circle it.



0 1 2 3 4 5
6 7 8 9 10

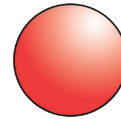


EYFS Maths Activity Mat


2 monsters counted their eyes.
Which monster do you think had
the **most** eyes? Circle it.



Match the object to the shape.



Can you draw 6 dots
on the dice?



Which nest has 0 eggs? Circle it.



0 1 2 3 4 5
6 7 8 9 10

